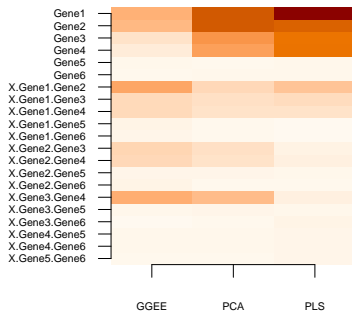
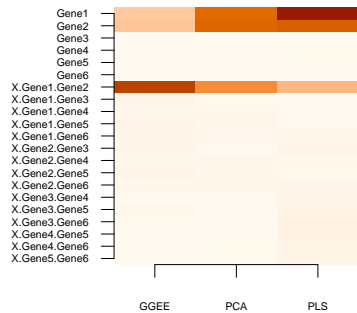


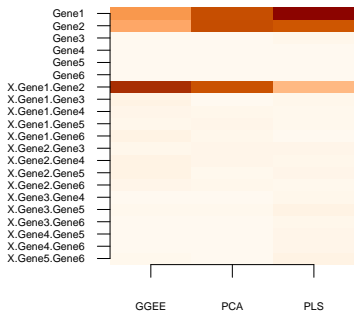
Cadre A ; $R^2 = 0.4$



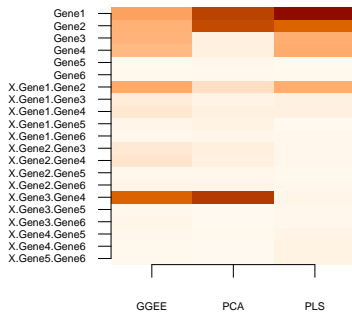
Cadre C ; $R^2 = 0.4$



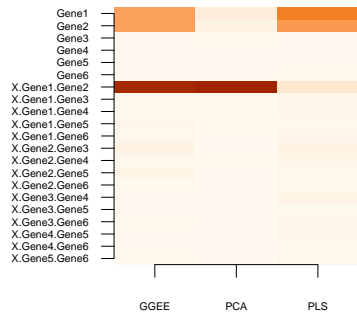
Cadre E ; $R^2 = 0.4$



Cadre B ; $R^2 = 0.4$



Cadre D ; $R^2 = 0.4$



Cadre F ; $R^2 = 0.4$